

## Aufgabe 1

1.  $\frac{1}{5}$  =

2.  $\frac{2}{5}$  =


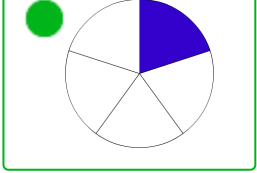

3.  $\frac{1}{3}$  =

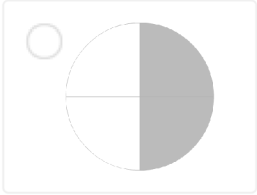
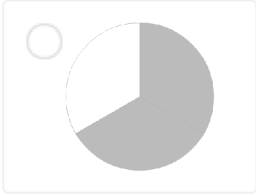
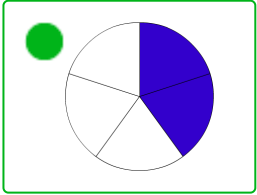
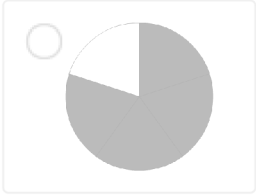
4.  $\frac{1}{4}$  =

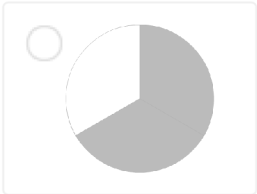
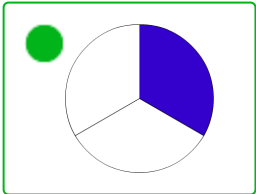
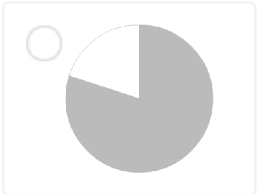
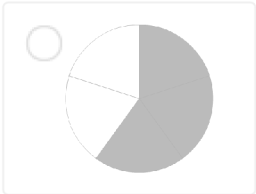
5.  $\frac{1}{3}$  =

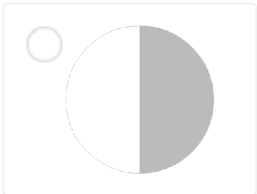
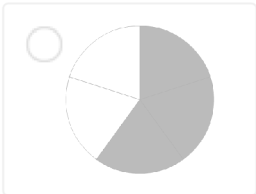
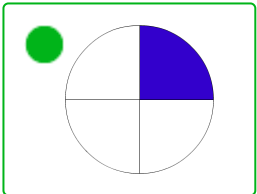
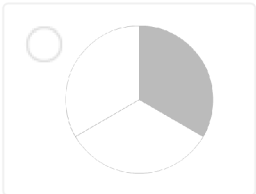
6.  $\frac{1}{5}$  =

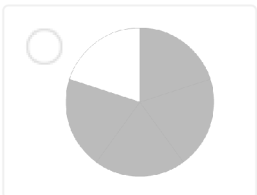
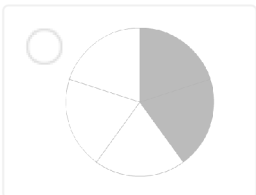
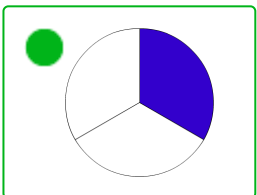
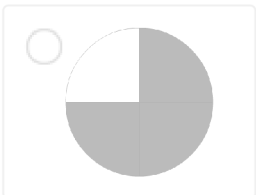
Aufgabe 1

1.  $\frac{1}{5}$  =    

2.  $\frac{2}{5}$  =    

3.  $\frac{1}{3}$  =    

4.  $\frac{1}{4}$  =    

5.  $\frac{1}{3}$  =    

6.  $\frac{1}{5}$  = 