


Aufgabe 1

1.  

Stunde en Minuten

.....

2.  

Stunde en Minuten

.....

3.  

Stunde en Minuten

.....

4.  

Stunde en Minuten


.....

5.  

Stunde en Minuten

.....

Aufgabe 2

1.  

Stunde en Minuten

.....

2.  

Stunde en Minuten

.....

3.  



Stunde en Minuten

.....

4.  

Stunde en Minuten

.....


5.  

Stunde en Minuten

.....




Aufgabe 1




2 Stunde en 9 Minuten


Aufgabe 2




7 Stunde en 19 Minuten



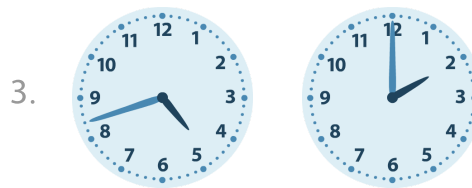
6 Stunde en 51 Minuten




4 Stunde en 1 Minuten




5 Stunde en 21 Minuten




2 Stunde en 42 Minuten



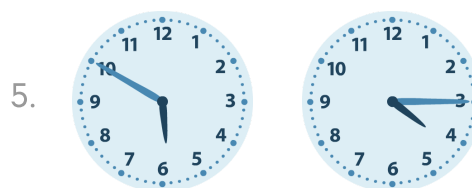
4 Stunde en 2 Minuten



6 Stunde en 48 Minuten



2 Stunde en 7 Minuten



1 Stunde en 35 Minuten