

Aufgabe 1

1.  

Stunde en Minuten

.....

2.  

Stunde en Minuten

.....

3.  

Stunde en Minuten

.....

4.  

Stunde en Minuten

.....

5.  

Stunde en Minuten

.....

Aufgabe 2

1.  

Stunde en Minuten

.....

2.  



Stunde en Minuten

.....

3.  

Stunde en Minuten

.....

4.  

Stunde en Minuten

.....

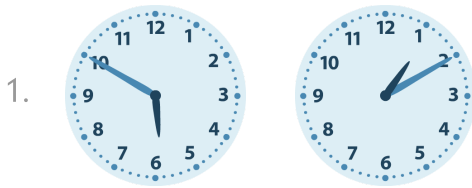
5.  

Stunde en Minuten


.....



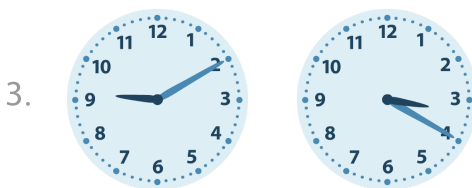
Aufgabe 1



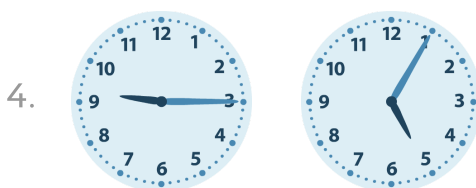
4 Stunde en 40 Minuten




2 Stunde en 15 Minuten



5 Stunde en 50 Minuten

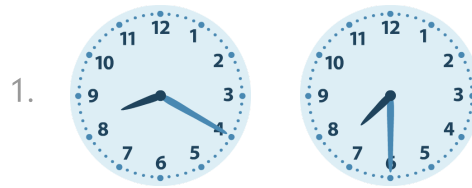


4 Stunde en 10 Minuten




8 Stunde en 0 Minuten

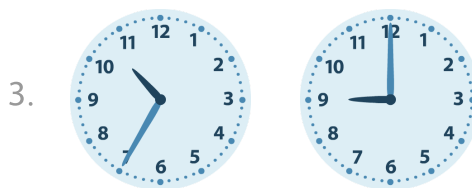
Aufgabe 2




0 Stunde en 50 Minuten



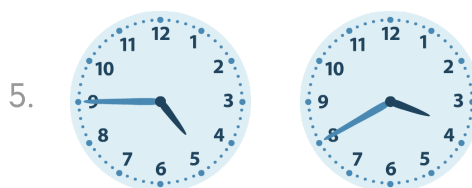
0 Stunde en 45 Minuten



1 Stunde en 35 Minuten



2 Stunde en 35 Minuten



1 Stunde en 5 Minuten