




Aufgabe 1

1.  



Stunde en Minuten

.....

2.  


Stunde en Minuten

.....

3.  

Stunde en Minuten

.....

4.  

Stunde en Minuten



.....

5.  

Stunde en Minuten


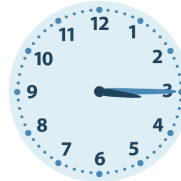
.....

Aufgabe 2

1.  

Stunde en Minuten

.....

2.  



Stunde en Minuten

.....

3.  


Stunde en Minuten

.....

4.  

Stunde en Minuten

.....


5.  

Stunde en Minuten


.....




Aufgabe 1




6 Stunde en 45 Minuten




9 Stunde en 15 Minuten



5 Stunde en 15 Minuten




4 Stunde en 30 Minuten

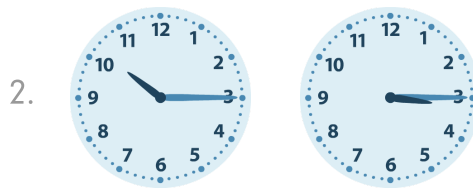


8 Stunde en 0 Minuten


Aufgabe 2



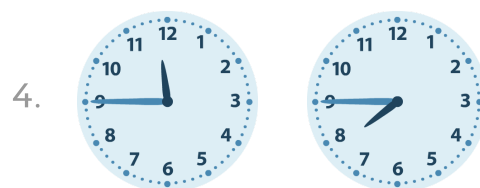
7 Stunde en 30 Minuten



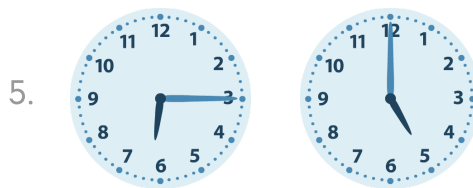
7 Stunde en 0 Minuten



5 Stunde en 0 Minuten



4 Stunde en 0 Minuten



1 Stunde en 15 Minuten