

Aufgabe 1

1.  

Stunde en Minuten

.....

2.  

Stunde en Minuten

.....

3.  

Stunde en Minuten

.....

4.  

Stunde en Minuten


.....

5.  

Stunde en Minuten

.....

Aufgabe 2

1.  

Stunde en Minuten

.....

2.  

Stunde en Minuten

.....

3.  

Stunde en Minuten

.....

4.  

Stunde en Minuten

.....


5.  

Stunde en Minuten

.....

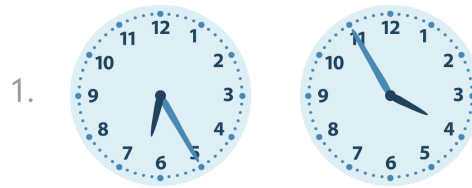


Aufgabe 1




7 Stunde en 55 Minuten


Aufgabe 2



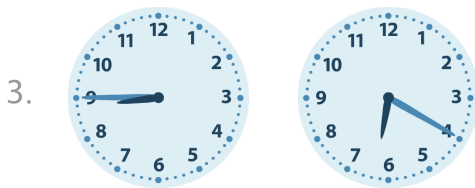
2 Stunde en 30 Minuten



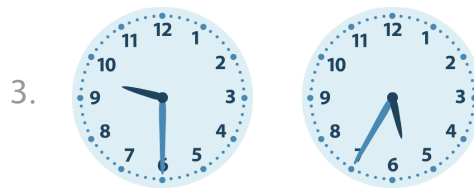
7 Stunde en 15 Minuten




1 Stunde en 25 Minuten



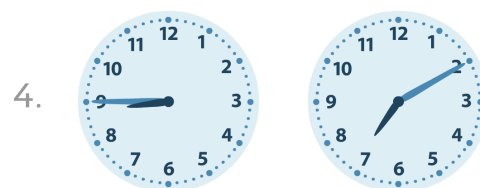
2 Stunde en 25 Minuten




3 Stunde en 55 Minuten




5 Stunde en 40 Minuten



1 Stunde en 35 Minuten



6 Stunde en 20 Minuten



3 Stunde en 50 Minuten