





### Aufgabe 1

1.  


Stunde en      Minuten

.....

2.  

Stunde en      Minuten

.....

3.  



Stunde en      Minuten

.....

4.  

Stunde en      Minuten

.....

5.  

Stunde en      Minuten



.....

### Aufgabe 2

1.  



Stunde en      Minuten

.....

2.  


Stunde en      Minuten

.....

3.  


Stunde en      Minuten

.....

4.  

Stunde en      Minuten

.....


5.  

Stunde en      Minuten


.....




### Aufgabe 1




3 Stunde en 0 Minuten




8 Stunde en 0 Minuten



8 Stunde en 30 Minuten




5 Stunde en 0 Minuten




3 Stunde en 0 Minuten


### Aufgabe 2




2 Stunde en 0 Minuten




10 Stunde en 0 Minuten



2 Stunde en 0 Minuten



3 Stunde en 30 Minuten



2 Stunde en 30 Minuten