



Aufgabe 1

1.  


Stunde en Minuten

.....

2.  


Stunde en Minuten

.....

3.  

Stunde en Minuten

.....

4.  

Stunde en Minuten



.....

5.  

Stunde en Minuten



.....

Aufgabe 2

1.  



Stunde en Minuten

.....

2.  



Stunde en Minuten

.....

3.  



Stunde en Minuten

.....

4.  

Stunde en Minuten


.....

5.  


Stunde en Minuten

.....


Aufgabe 1



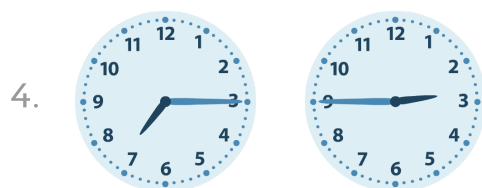
6 Stunde en 30 Minuten




0 Stunde en 15 Minuten



3 Stunde en 30 Minuten

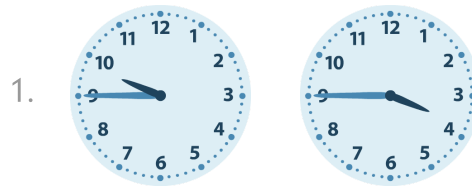


4 Stunde en 30 Minuten




0 Stunde en 15 Minuten

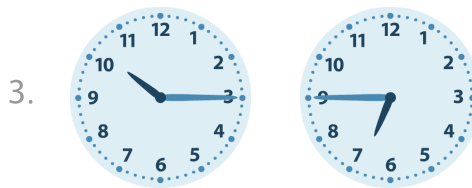
Aufgabe 2



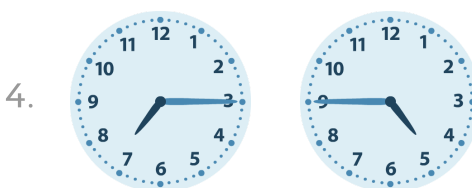
6 Stunde en 0 Minuten



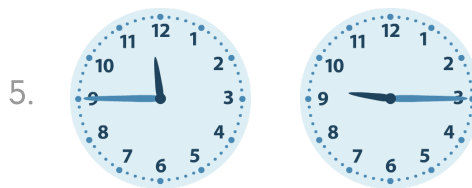
0 Stunde en 15 Minuten



3 Stunde en 30 Minuten



2 Stunde en 30 Minuten



2 Stunde en 30 Minuten