

Aufgabe 1

1.  

Stunde en Minuten

.....

2.  

Stunde en Minuten

.....

3.  

Stunde en Minuten

.....

4.  

Stunde en Minuten

.....

5.  

Stunde en Minuten

.....

Aufgabe 2

1.  



Stunde en Minuten

.....

2.  

Stunde en Minuten

.....

3.  



Stunde en Minuten

.....

4.  

Stunde en Minuten

.....


5.  

Stunde en Minuten

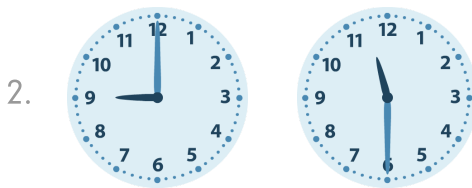
.....



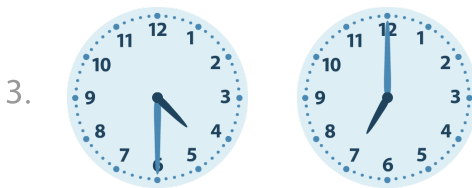
Aufgabe 1




0 Stunde en 30 Minuten




2 Stunde en 30 Minuten



2 Stunde en 30 Minuten




11 Stunde en 30 Minuten




4 Stunde en 30 Minuten


Aufgabe 2




5 Stunde en 30 Minuten




6 Stunde en 30 Minuten



5 Stunde en 30 Minuten



4 Stunde en 0 Minuten



1 Stunde en 0 Minuten