



Aufgabe 1

1.    
Stunde en      Minuten  
.....


2.    
Stunde en      Minuten  
.....



3.    
Stunde en      Minuten  
.....



4.    
Stunde en      Minuten  
.....

5.    
Stunde en      Minuten  
.....


Aufgabe 2

1.    
Stunde en      Minuten  
.....

2.    
Stunde en      Minuten  
.....


3.    
Stunde en      Minuten  
.....

4.    
Stunde en      Minuten  
.....


5.    
Stunde en      Minuten  
.....




### Aufgabe 1




4 Stunde en 45 Minuten




2 Stunde en 0 Minuten



8 Stunde en 0 Minuten




0 Stunde en 30 Minuten




3 Stunde en 30 Minuten

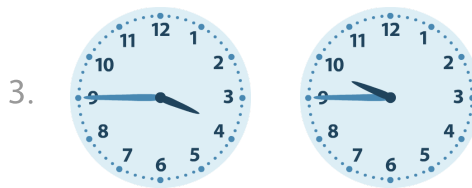
### Aufgabe 2




3 Stunde en 15 Minuten




7 Stunde en 15 Minuten



6 Stunde en 0 Minuten



3 Stunde en 15 Minuten



3 Stunde en 30 Minuten