

## Aufgabe 1

1.  

Stunde en      Minuten

.....

2.  

Stunde en      Minuten

.....

3.  

Stunde en      Minuten

.....

4.  

Stunde en      Minuten

.....

5.  

Stunde en      Minuten

.....

## Aufgabe 2

1.  

Stunde en      Minuten

.....

2.  

Stunde en      Minuten

.....

3.  

Stunde en      Minuten

.....

4.  

Stunde en      Minuten

.....


5.  

Stunde en      Minuten


.....




### Aufgabe 1




6 Stunde en 35 Minuten



0 Stunde en 49 Minuten



4 Stunde en 58 Minuten

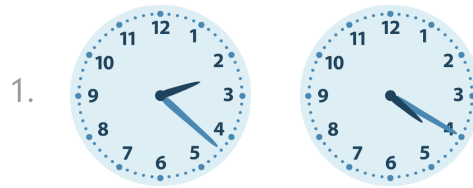


7 Stunde en 10 Minuten

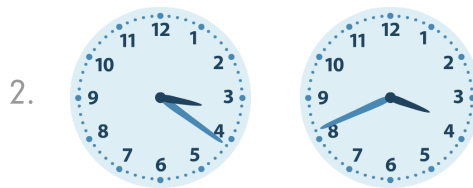


1 Stunde en 30 Minuten


### Aufgabe 2




1 Stunde en 58 Minuten




0 Stunde en 20 Minuten



3 Stunde en 21 Minuten



0 Stunde en 55 Minuten



3 Stunde en 40 Minuten