

## Aufgabe 1

1.  

Stunde en      Minuten

.....

2.  

Stunde en      Minuten

.....

3.  

Stunde en      Minuten

.....

4.  

Stunde en      Minuten

.....

5.  

Stunde en      Minuten

.....

## Aufgabe 2

1.  

Stunde en      Minuten

.....

2.  

Stunde en      Minuten

.....

3.  


Stunde en      Minuten

.....

4.  

Stunde en      Minuten

.....


5.  

Stunde en      Minuten

.....




### Aufgabe 1




2 Stunde en 30 Minuten


### Aufgabe 2



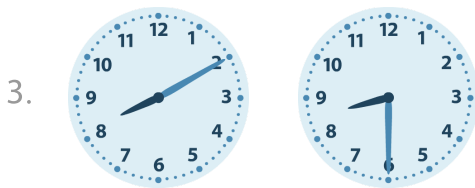
1 Stunde en 5 Minuten



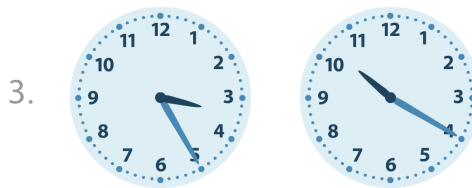
1 Stunde en 0 Minuten




7 Stunde en 30 Minuten



0 Stunde en 20 Minuten




6 Stunde en 55 Minuten



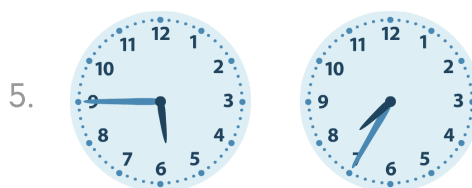
0 Stunde en 50 Minuten



9 Stunde en 30 Minuten



1 Stunde en 50 Minuten



1 Stunde en 50 Minuten