





Aufgabe 1

1.  



Stunde en      Minuten

.....

2.  

Stunde en      Minuten

.....

3.  



Stunde en      Minuten

.....

4.  

Stunde en      Minuten

.....

5.  

Stunde en      Minuten



.....

Aufgabe 2

1.  



Stunde en      Minuten

.....

2.  

Stunde en      Minuten

.....

3.  



Stunde en      Minuten

.....

4.  

Stunde en      Minuten

.....


5.  

Stunde en      Minuten

.....




### Aufgabe 1




9 Stunde en 30 Minuten

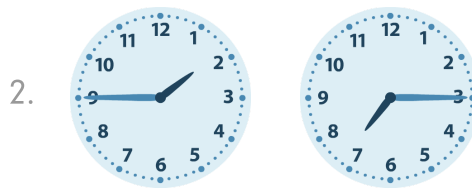
### Aufgabe 2



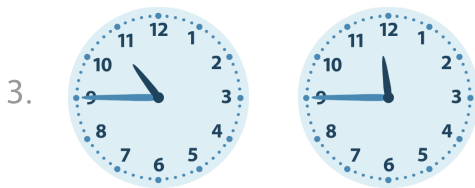
10 Stunde en 45 Minuten




8 Stunde en 45 Minuten



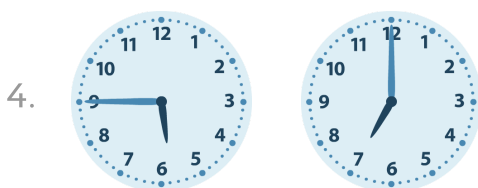
5 Stunde en 30 Minuten



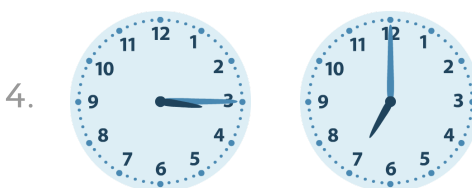
1 Stunde en 0 Minuten



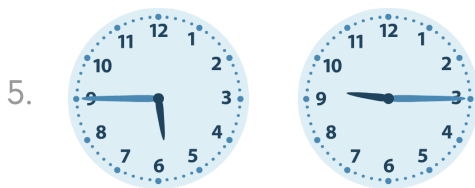
1 Stunde en 15 Minuten



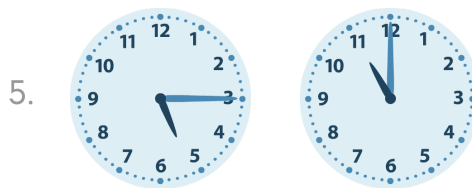
1 Stunde en 15 Minuten



3 Stunde en 45 Minuten



3 Stunde en 30 Minuten



5 Stunde en 45 Minuten