

## Aufgabe 1

1.  

Stunde en      Minuten

.....

2.  

Stunde en      Minuten

.....

3.  

Stunde en      Minuten

.....

4.  

Stunde en      Minuten

.....

5.  

Stunde en      Minuten

.....

## Aufgabe 2

1.  

Stunde en      Minuten

.....

2.  

Stunde en      Minuten

.....

3.  

Stunde en      Minuten

.....

4.  

Stunde en      Minuten

.....

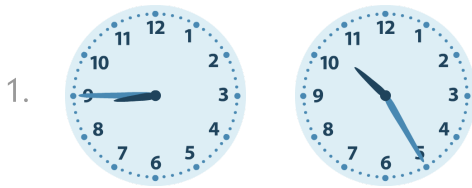
5.  

Stunde en      Minuten


.....



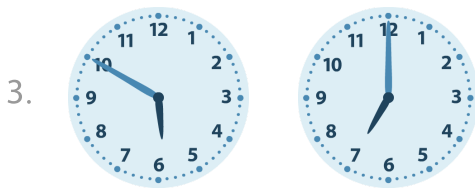
### Aufgabe 1




1 Stunde en 40 Minuten



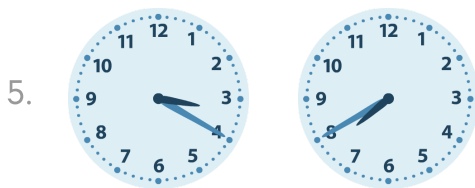
4 Stunde en 10 Minuten



1 Stunde en 10 Minuten




5 Stunde en 0 Minuten

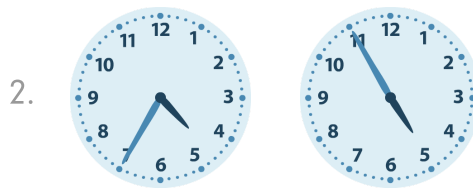


4 Stunde en 20 Minuten

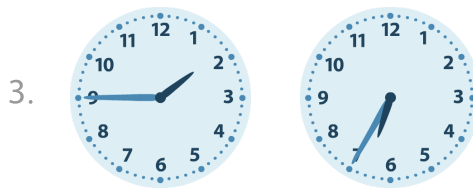
### Aufgabe 2




5 Stunde en 50 Minuten



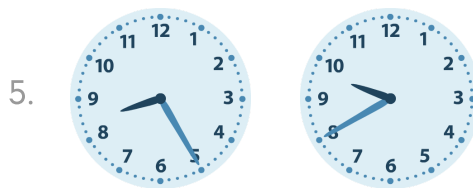
0 Stunde en 20 Minuten



4 Stunde en 50 Minuten



4 Stunde en 55 Minuten



1 Stunde en 15 Minuten