


Aufgabe 1

1.  

Stunde en Minuten

.....

2.  

Stunde en Minuten

.....

3.  

Stunde en Minuten

.....

4.  

Stunde en Minuten


.....

5.  

Stunde en Minuten

.....

Aufgabe 2

1.  

Stunde en Minuten

.....

2.  

Stunde en Minuten

.....

3.  

Stunde en Minuten

.....

4.  

Stunde en Minuten

.....


5.  

Stunde en Minuten

.....




Aufgabe 1




3 Stunde en 10 Minuten

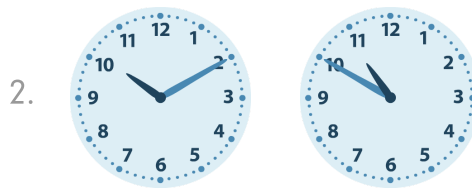
Aufgabe 2



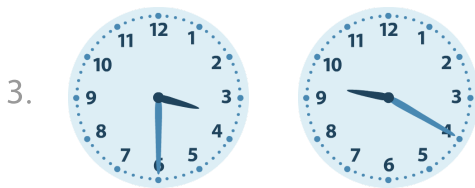
3 Stunde en 10 Minuten




4 Stunde en 15 Minuten




0 Stunde en 40 Minuten




5 Stunde en 50 Minuten




11 Stunde en 15 Minuten




3 Stunde en 25 Minuten



2 Stunde en 20 Minuten



9 Stunde en 15 Minuten



8 Stunde en 35 Minuten