

Aufgabe 1

1.  

Stunde en Minuten

.....

2.  


Stunde en Minuten

.....

3.  



Stunde en Minuten

.....

4.  

Stunde en Minuten



.....

5.  

Stunde en Minuten

.....

Aufgabe 2

1.  

Stunde en Minuten

.....

2.  


Stunde en Minuten

.....

3.  



Stunde en Minuten

.....

4.  

Stunde en Minuten

.....


5.  

Stunde en Minuten

.....

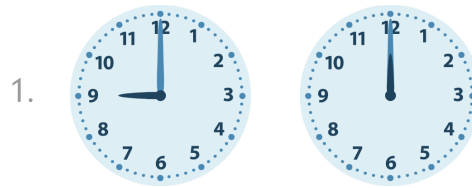


Aufgabe 1




7 Stunde en 0 Minuten


Aufgabe 2




3 Stunde en 0 Minuten




5 Stunde en 0 Minuten




4 Stunde en 0 Minuten




2 Stunde en 0 Minuten




3 Stunde en 0 Minuten




3 Stunde en 0 Minuten



1 Stunde en 0 Minuten



3 Stunde en 0 Minuten



3 Stunde en 0 Minuten