


Aufgabe 1

1.  



Stunde Minuten

.....

2.  



Stunde Minuten

.....

3.  



Stunde Minuten

.....

4.  

Stunde Minuten

.....

5.  

Stunde Minuten



.....

Aufgabe 2

1.  



Stunde Minuten

.....

2.  


Stunde Minuten

.....

3.  


Stunde Minuten

.....

4.  

Stunde Minuten


.....

5.  


Stunde Minuten

.....


Aufgabe 1




9 Stunde 0 Minuten




6 Stunde 0 Minuten



1 Stunde 0 Minuten




3 Stunde 0 Minuten




9 Stunde 0 Minuten


Aufgabe 2




4 Stunde 0 Minuten




5 Stunde 0 Minuten



2 Stunde 0 Minuten



1 Stunde 0 Minuten



1 Stunde 0 Minuten