

## Aufgabe 1

1.  

Stunde en      Minuten

.....

2.  

Stunde en      Minuten

.....

3.  

Stunde en      Minuten

.....

4.  

Stunde en      Minuten

.....

5.  

Stunde en      Minuten



.....

## Aufgabe 2

1.  

Stunde en      Minuten

.....

2.  



Stunde en      Minuten

.....

3.  



Stunde en      Minuten

.....

4.  

Stunde en      Minuten

.....


5.  

Stunde en      Minuten


.....




### Aufgabe 1




0 Stunde en 30 Minuten




2 Stunde en 30 Minuten



4 Stunde en 0 Minuten

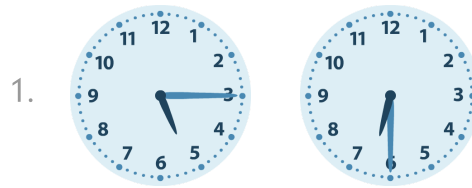


0 Stunde en 45 Minuten

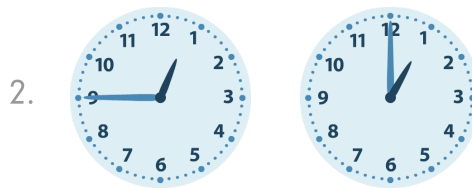


4 Stunde en 15 Minuten


### Aufgabe 2



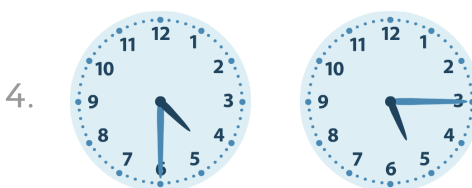
1 Stunde en 15 Minuten




0 Stunde en 15 Minuten



5 Stunde en 30 Minuten



0 Stunde en 45 Minuten



6 Stunde en 45 Minuten