



## Aufgabe 1

1.  



Stunde      Minuten

.....

2.  

Stunde      Minuten

.....

3.  


Stunde      Minuten

.....

4.  

Stunde      Minuten



.....

5.  

Stunde      Minuten

.....

## Aufgabe 2

1.  



Stunde      Minuten

.....

2.  

Stunde      Minuten

.....

3.  


Stunde      Minuten

.....

4.  

Stunde      Minuten


.....

5.  


Stunde      Minuten

.....


## Aufgabe 1




5 Stunde 0 Minuten




2 Stunde 0 Minuten



6 Stunde 0 Minuten




5 Stunde 0 Minuten




6 Stunde 0 Minuten


## Aufgabe 2




1 Stunde 0 Minuten




3 Stunde 0 Minuten



10 Stunde 0 Minuten



5 Stunde 0 Minuten



3 Stunde 0 Minuten