

Aufgabe 1

1.  



Stunde Minuten

.....

2.  

Stunde Minuten

.....

3.  



Stunde Minuten

.....

4.  

Stunde Minuten



.....

5.  

Stunde Minuten

.....

Aufgabe 2

1.  

Stunde Minuten

.....

2.  

Stunde Minuten

.....

3.  

Stunde Minuten

.....

4.  

Stunde Minuten


.....

5.  


Stunde Minuten

.....


Aufgabe 1




5 Stunde 30 Minuten




4 Stunde 30 Minuten



3 Stunde 0 Minuten




3 Stunde 30 Minuten




7 Stunde 0 Minuten


Aufgabe 2




4 Stunde 0 Minuten




6 Stunde 0 Minuten



9 Stunde 0 Minuten



8 Stunde 0 Minuten



1 Stunde 30 Minuten