



Aufgabe 1

1.  



Stunde Minuten

.....

2.  



Stunde Minuten

.....

3.  



Stunde Minuten

.....

4.  

Stunde Minuten

.....

5.  

Stunde Minuten

.....

Aufgabe 2

1.  

Stunde Minuten

.....

2.  


Stunde Minuten

.....

3.  

Stunde Minuten

.....

4.  

Stunde Minuten


.....

5.  

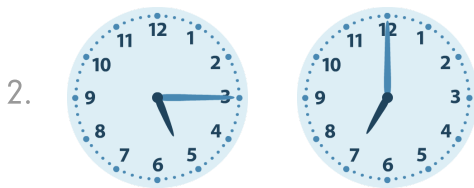
Stunde Minuten

.....


Aufgabe 1




1 Stunde 45 Minuten



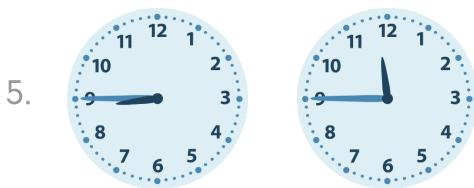
1 Stunde 45 Minuten



0 Stunde 15 Minuten




8 Stunde 0 Minuten




3 Stunde 0 Minuten

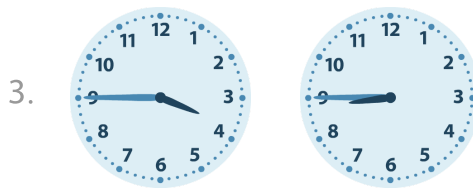
Aufgabe 2




0 Stunde 30 Minuten



1 Stunde 45 Minuten



5 Stunde 0 Minuten



7 Stunde 30 Minuten



4 Stunde 45 Minuten