



Aufgabe 1

1.  

Stunde en Minuten

.....

2.  

Stunde en Minuten

.....

3.  


Stunde en Minuten

.....

4.  

Stunde en Minuten

.....

5.  

Stunde en Minuten


.....

Aufgabe 2

1.  

Stunde en Minuten

.....

2.  


Stunde en Minuten

.....

3.  



Stunde en Minuten

.....

4.  

Stunde en Minuten

.....


5.  

Stunde en Minuten

.....




Aufgabe 1




3 Stunde en 0 Minuten


Aufgabe 2




0 Stunde en 30 Minuten




1 Stunde en 0 Minuten




5 Stunde en 30 Minuten




3 Stunde en 0 Minuten




5 Stunde en 30 Minuten




0 Stunde en 30 Minuten



4 Stunde en 30 Minuten



1 Stunde en 0 Minuten



1 Stunde en 30 Minuten