



Aufgabe 1

1.  



Stunde en Minuten

.....

2.  


Stunde en Minuten

.....

3.  


Stunde en Minuten

.....

4.  

Stunde en Minuten

.....

5.  

Stunde en Minuten


.....

Aufgabe 2

1.  



Stunde en Minuten

.....

2.  


Stunde en Minuten

.....

3.  


Stunde en Minuten

.....

4.  

Stunde en Minuten

.....

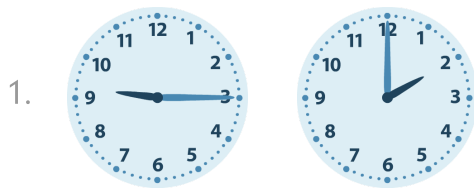
5.  

Stunde en Minuten

.....




Aufgabe 1

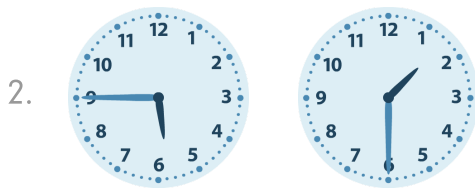


7 Stunde en 15 Minuten


Aufgabe 2




5 Stunde en 0 Minuten



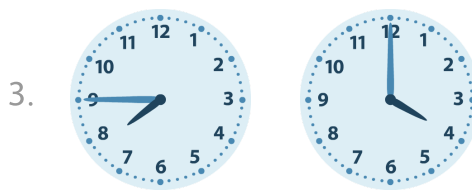
4 Stunde en 15 Minuten




2 Stunde en 0 Minuten




7 Stunde en 0 Minuten



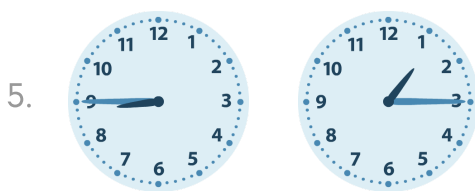
3 Stunde en 45 Minuten



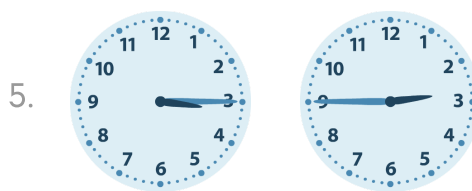
0 Stunde en 15 Minuten



2 Stunde en 30 Minuten



7 Stunde en 30 Minuten



0 Stunde en 30 Minuten