





Name: .....

1 Ergänze die fehlenden Zahlen.




1	2	3	4	5	6	7	8	9	10
11	12			15	16			19	20
21		23	24			27	28		30
	32	33	34	35	36	37	38	39	
	42	43	44	45	46	47	48	49	
51		53	54	55	56	57	58		60
61		63	64	65	66	67	68		70
71	72		74	75	76	77		79	80
81	82	83		85	86		88	89	90
91	92	93	94			97	98	99	100





Name: .....



1 Ergänze die fehlenden Zahlen.

1	2	3	4	5	6	7	8	9	10
11	12	13	14	15	16	17	18	19	20
21	22	23	24	25	26	27	28	29	30
31	32	33	34	35	36	37	38	39	40
41	42	43	44	45	46	47	48	49	50
51	52	53	54	55	56	57	58	59	60
61	62	63	64	65	66	67	68	69	70
71	72	73	74	75	76	77	78	79	80
81	82	83	84	85	86	87	88	89	90
91	92	93	94	95	96	97	98	99	100

