




Wie viele Finger zählst du? [1]




Mengen

1.




0 1 5 3

2.




9 5 3 1

3.



1 2 8 3

4.




6 5 8 7

5.




0 4 9 2

6.




8 1 10 6

7.




9 2 6 5

8.




4 7 8 3

9.



5 0 10 2

10.



10 0 7 0

11.




4 0 7 0

12.




0 4 10 0

1.




0 1 5 3

2.




9 5 3 1

3.



1 2 8 3

4.




6 5 8 7

5.




0 4 9 2

6.




8 1 10 6

7.




9 2 6 5

8.




4 7 8 3

9.



5 0 10 2

10.




10 5 7 2

11.



6 2 7 3

12.



2 1 10 2