




# Wie viele Finger zählst du? [1]




Mengen

1.




10 9 3 7

2.




9 8 6 2

3.




7 0 3 10

4.




8 1 5 4

5.




3 5 10 8

6.




5 7 9 2

7.



8 10 1 3

8.



7 1 5 10

9.




5 0 8 7

10.



5 6 10 4

11.




10 4 7 0

12.




4 0 4 4

1.




10 9 3 7

2.




9 8 6 2

3.




7 0 3 10

4.




8 1 5 4

5.



3 5 10 8

6.




5 7 9 2

7.



8 10 1 3

8.



7 1 5 10

9.




5 0 8 7

10.



5 4 10 4

11.



10 4 7 2

12.



4 0 7 4