




Wie viele Finger zählst du? [1]




Mengen

1.



5 1 0 6

2.




1 0 10 3

3.



7 9 1 8

4.



5 1 2 7

5.




10 5 8 6

6.




3 10 2 8

7.



3 9 2 8

8.



4 0 6 3

9.




1 2 4 0

10.




4 10 6 0

11.




2 3 6 0

12.




4 3 1 0

1.




5 1 0 6

2.




1 0 10 3

3.



7 9 1 8

4.




5 1 2 7

5.




10 5 8 6

6.




3 10 2 8

7.



3 9 2 8

8.



4 0 6 3

9.




1 2 4 0

10.



10 7 1 0

11.



2 4 1 0

12.



4 1 1 0