




# Wie viele Finger zählst du? [4]



Mengen

1.



1 7 6 8

2.



0 9 8 7

3.




7 8 1 6

4.



7 10 0 2

5.




8 3 1 10

6.




2 6 7 8

7.




7 3 6 2

8.



8 7 10 2

9.



4 2 5 3

10.



0 6 4 1

11.




7 1 0 5

12.



3 10 7 0

1.



1 7 6 8

2.



0 9 8 7

3.




7 8 1 6

4.



7 10 0 2

5.




8 3 1 10

6.




2 6 7 8

7.




7 3 6 2

8.



8 7 10 2

9.



4 2 5 3

10.



5 4 4 4

11.



7 1 5 5

12.



5 10 7 0