




Wie viele Finger zählst du? [4]




Mengen

1.




7 3 8 9

2.




4 1 10 6

3.




9 1 5 10

4.



8 6 10 2

5.




10 0 3 1

6.




3 5 1 8

7.



6 2 10 8

8.



6 5 3 1

9.



7 0 3 4

10.




4 7 10 9

11.




7 4 9 9

12.




9 5 1 9

1.




7 3 8 9

2.




4 1 10 6

3.




9 1 5 10

4.




8 6 10 2

5.




10 0 3 1

6.




3 5 1 8

7.




6 2 10 8

8.



6 5 3 1

9.



7 0 3 4

10.




7 10 7 9

11.



7 4 7 9

12.



9 5 1 9