




Wie viele Finger zählst du? [4]




Mengen

1.



1 9 5 6

2.




0 5 6 1

3.



3 0 10 2

4.



6 4 1 9

5.



6 7 2 10

6.




2 8 7 9

7.




8 3 6 9

8.




10 8 1 2

9.



3 2 7 9

10.




0 4 0 10

11.




0 10 0 6

12.



4 0 7 4

1.



1 9 5 6

2.



0 5 6 1

3.



3 0 10 2

4.



6 4 1 9

5.




6 7 2 10

6.




2 8 7 9

7.




8 3 6 9

8.




10 8 1 2

9.



3 2 7 9

10.




6 1 0 10

11.



0 10 0 6

12.



4 0 7 1