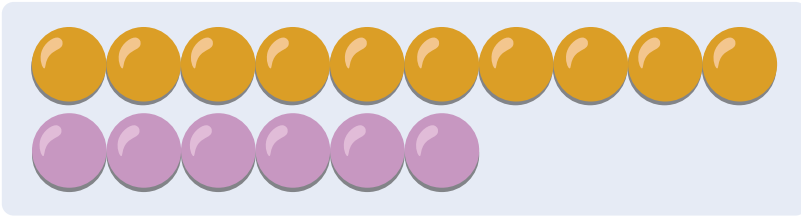


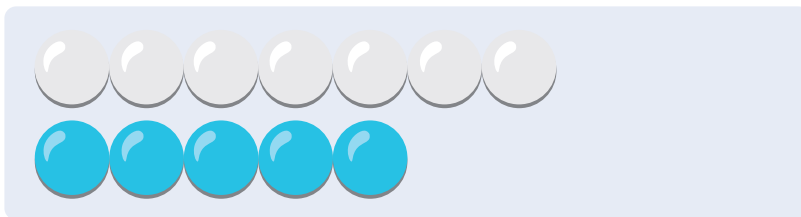


Name:


1 Ergänze und rechne aus.




$$\dots\dots + \dots\dots = \dots\dots$$



$$\dots\dots + \dots\dots = \dots\dots$$




$$\dots\dots + \dots\dots = \dots\dots$$



$$\dots\dots + \dots\dots = \dots\dots$$



$$\dots\dots + \dots\dots = \dots\dots$$




$$\dots\dots + \dots\dots = \dots\dots$$




Name:


1 Ergänze und rechne aus.




$$\dots 10 \dots + \dots 6 \dots = \dots 16 \dots$$




$$\dots 7 \dots + \dots 5 \dots = \dots 12 \dots$$



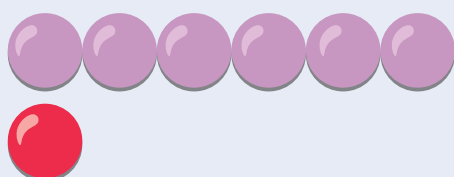
$$\dots 8 \dots + \dots 3 \dots = \dots 11 \dots$$



$$\dots 10 \dots + \dots 2 \dots = \dots 12 \dots$$



$$\dots 5 \dots + \dots 3 \dots = \dots 8 \dots$$



$$\dots 6 \dots + \dots 1 \dots = \dots 7 \dots$$