




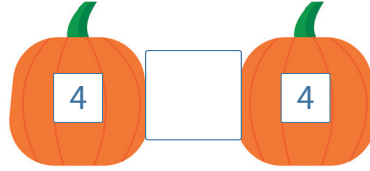
Verdoppeln und Nachbaraufgaben

Name:

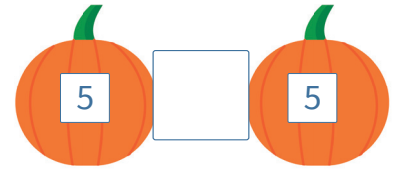
1 Wie viel ist es insgesamt? Rechne aus und ergänze.



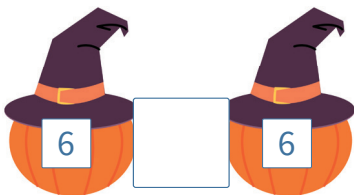
$3 + 3 = \dots\dots\dots$



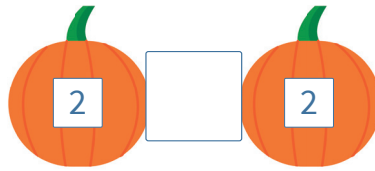
$4 + 4 = \dots\dots\dots$



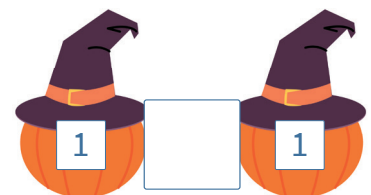
$5 + 5 = \dots\dots\dots$



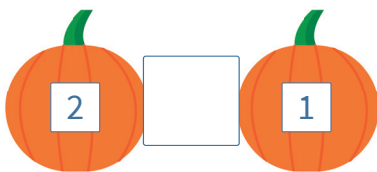
$6 + 6 = \dots\dots\dots$



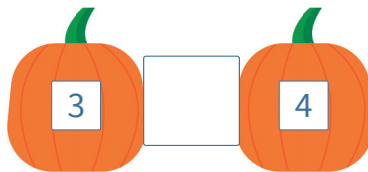
$2 + 2 = \dots\dots\dots$



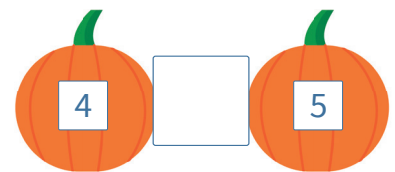
$1 + 1 = \dots\dots\dots$



$2 + 1 = \dots\dots\dots$



$3 + 4 = \dots\dots\dots$



$4 + 5 = \dots\dots\dots$

2 Rechne aus.

$2 + 2 = \dots\dots\dots$

$4 + 3 = \dots\dots\dots$

$3 + 3 = \dots\dots\dots$

$1 + 2 = \dots\dots\dots$

$4 + 5 = \dots\dots\dots$

$3 + 4 = \dots\dots\dots$

$3 + 3 = \dots\dots\dots$

$5 + 5 = \dots\dots\dots$

$4 + 4 = \dots\dots\dots$

$2 + 3 = \dots\dots\dots$

$1 + 1 = \dots\dots\dots$

$4 + 5 = \dots\dots\dots$

$4 + 4 = \dots\dots\dots$

$1 + 2 = \dots\dots\dots$

$5 + 5 = \dots\dots\dots$