

**Aufgabe 1**

1.  

Stunde en      Minuten

.....

2.  

Stunde en      Minuten

.....

3.  

Stunde en      Minuten

.....

4.  

Stunde en      Minuten



.....

5.  

Stunde en      Minuten

.....

**Aufgabe 2**

1.  

Stunde en      Minuten

.....

2.  

Stunde en      Minuten

.....

3.  



Stunde en      Minuten

.....

4.  

Stunde en      Minuten

.....


5.  

Stunde en      Minuten

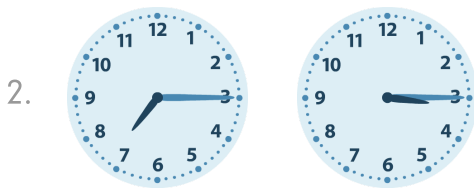
.....




### Aufgabe 1




5 Stunde en 15 Minuten



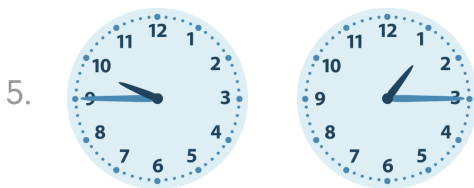
4 Stunde en 0 Minuten



4 Stunde en 15 Minuten

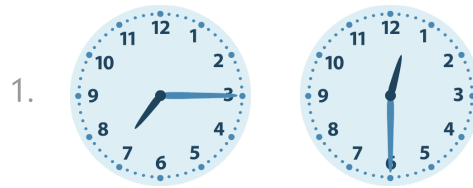


5 Stunde en 0 Minuten

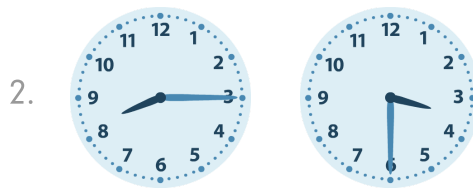


8 Stunde en 30 Minuten

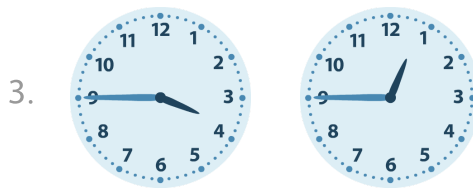
### Aufgabe 2




6 Stunde en 45 Minuten




4 Stunde en 45 Minuten



3 Stunde en 0 Minuten



1 Stunde en 15 Minuten



4 Stunde en 45 Minuten