

Aufgabe 1

1.  

Stunde en Minuten

.....

2.  

Stunde en Minuten

.....

3.  

Stunde en Minuten

.....

4.  

Stunde en Minuten


.....

5.  

Stunde en Minuten

.....

Aufgabe 2

1.  


Stunde en Minuten

.....

2.  

Stunde en Minuten

.....

3.  

Stunde en Minuten

.....

4.  

Stunde en Minuten

.....


5.  

Stunde en Minuten


.....



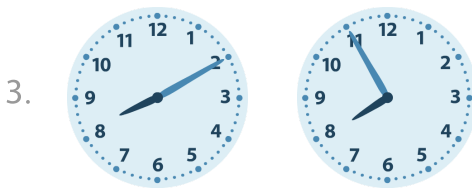
Aufgabe 1



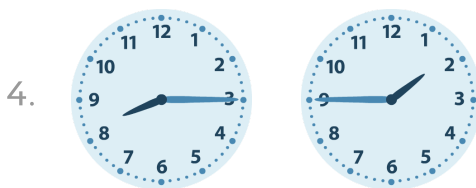
4 Stunde en 35 Minuten



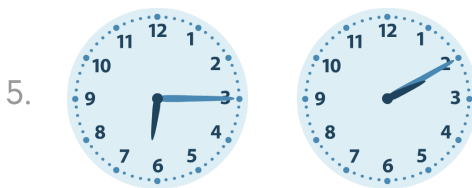
1 Stunde en 45 Minuten



0 Stunde en 15 Minuten




6 Stunde en 30 Minuten




4 Stunde en 5 Minuten

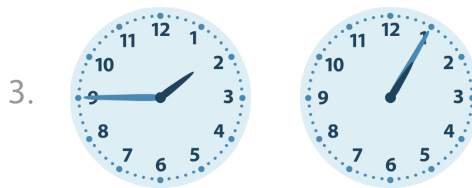
Aufgabe 2




7 Stunde en 40 Minuten




2 Stunde en 20 Minuten



0 Stunde en 40 Minuten



0 Stunde en 30 Minuten



3 Stunde en 20 Minuten