

## Aufgabe 1

1.  

Stunde en      Minuten

.....

2.  

Stunde en      Minuten

.....

3.  

Stunde en      Minuten

.....

4.  

Stunde en      Minuten

.....

5.  

Stunde en      Minuten

.....

## Aufgabe 2

1.  


Stunde en      Minuten

.....

2.  

Stunde en      Minuten

.....

3.  


Stunde en      Minuten

.....

4.  

Stunde en      Minuten

.....


5.  

Stunde en      Minuten


.....




### Aufgabe 1




5 Stunde en 30 Minuten




1 Stunde en 0 Minuten



9 Stunde en 0 Minuten




3 Stunde en 0 Minuten

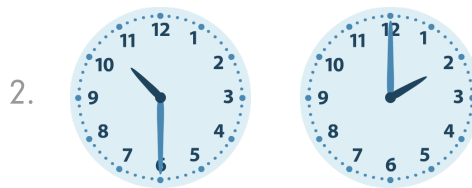


4 Stunde en 0 Minuten


### Aufgabe 2



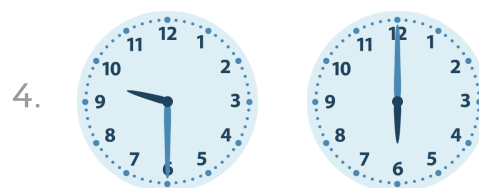
0 Stunde en 30 Minuten




8 Stunde en 30 Minuten



0 Stunde en 30 Minuten



3 Stunde en 30 Minuten



3 Stunde en 0 Minuten