

**Aufgabe 1**

1.  

Stunde en      Minuten

.....

2.  

Stunde en      Minuten

.....

3.  

Stunde en      Minuten

.....

4.  

Stunde en      Minuten

.....

5.  

Stunde en      Minuten

.....

**Aufgabe 2**

1.  

Stunde en      Minuten

.....

2.  

Stunde en      Minuten

.....

3.  


Stunde en      Minuten

.....

4.  

Stunde en      Minuten

.....


5.  

Stunde en      Minuten

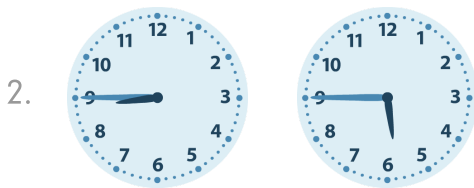
.....




### Aufgabe 1




4 Stunde en 15 Minuten




3 Stunde en 0 Minuten



4 Stunde en 45 Minuten




0 Stunde en 30 Minuten

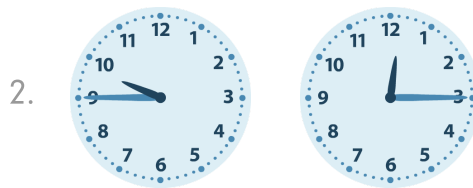


5 Stunde en 30 Minuten


### Aufgabe 2




5 Stunde en 30 Minuten



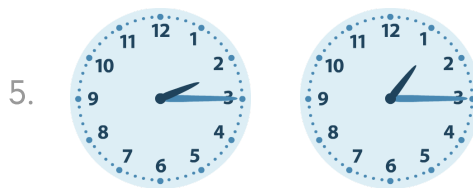
9 Stunde en 30 Minuten



9 Stunde en 45 Minuten



11 Stunde en 0 Minuten



1 Stunde en 0 Minuten