

Aufgabe 1

1.  

Stunde en Minuten

.....

2.  

Stunde en Minuten

.....

3.  

Stunde en Minuten

.....

4.  

Stunde en Minuten

.....

5.  

Stunde en Minuten

.....

Aufgabe 2

1.  

Stunde en Minuten

.....

2.  

Stunde en Minuten

.....

3.  

Stunde en Minuten

.....

4.  

Stunde en Minuten

.....


5.  

Stunde en Minuten


.....



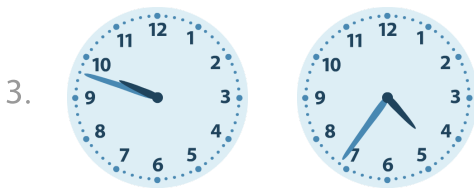
Aufgabe 1



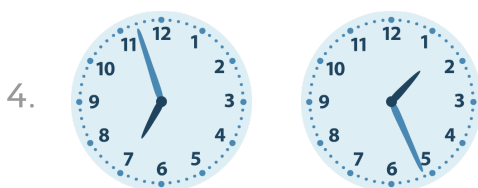
0 Stunde en 15 Minuten




0 Stunde en 43 Minuten



5 Stunde en 12 Minuten

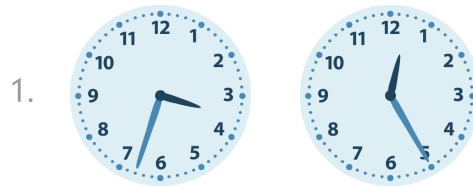


5 Stunde en 31 Minuten




0 Stunde en 40 Minuten


Aufgabe 2



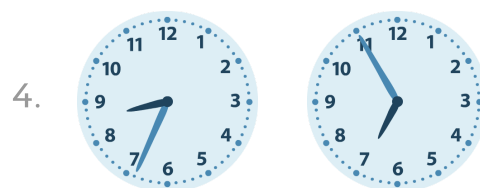
3 Stunde en 8 Minuten




3 Stunde en 3 Minuten



3 Stunde en 9 Minuten



1 Stunde en 39 Minuten



5 Stunde en 54 Minuten