

Aufgabe 1

1.  

Stunde en Minuten

.....

2.  


Stunde en Minuten

.....

3.  

Stunde en Minuten

.....

4.  

Stunde en Minuten

.....

5.  

Stunde en Minuten

.....

Aufgabe 2

1.  

Stunde en Minuten

.....

2.  

Stunde en Minuten

.....

3.  


Stunde en Minuten

.....

4.  

Stunde en Minuten

.....

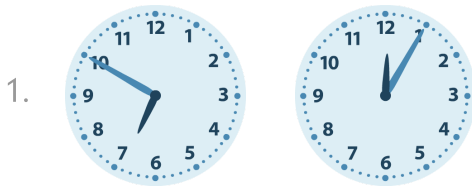
5.  

Stunde en Minuten

.....

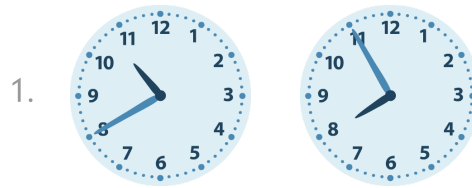


Aufgabe 1




6 Stunde en 45 Minuten


Aufgabe 2



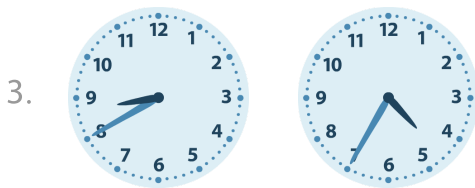
2 Stunde en 45 Minuten




6 Stunde en 15 Minuten



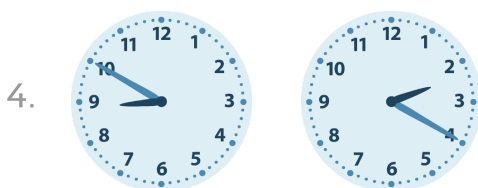
4 Stunde en 15 Minuten




4 Stunde en 5 Minuten



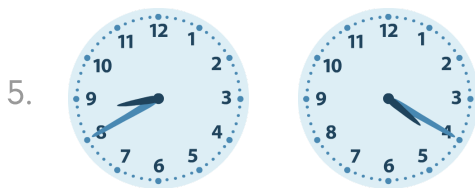
4 Stunde en 40 Minuten




6 Stunde en 30 Minuten



4 Stunde en 40 Minuten



4 Stunde en 20 Minuten



1 Stunde en 25 Minuten