

Aufgabe 1

1.  

Stunde en Minuten

.....

2.  

Stunde en Minuten

.....

3.  

Stunde en Minuten

.....

4.  

Stunde en Minuten

.....

5.  

Stunde en Minuten

.....

Aufgabe 2

1.  

Stunde en Minuten

.....

2.  


Stunde en Minuten

.....

3.  

Stunde en Minuten

.....

4.  

Stunde en Minuten

.....

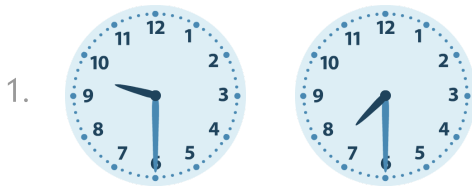
5.  

Stunde en Minuten

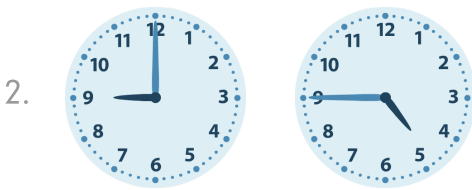
.....




Aufgabe 1



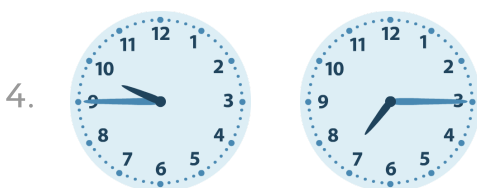
2 Stunde en 0 Minuten




4 Stunde en 15 Minuten



5 Stunde en 45 Minuten




2 Stunde en 30 Minuten

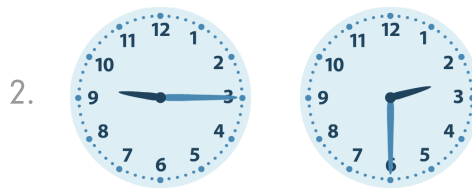


7 Stunde en 15 Minuten


Aufgabe 2



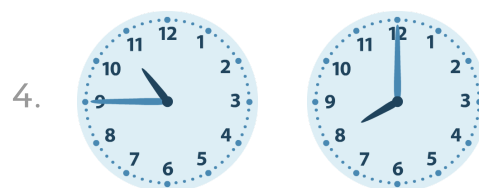
2 Stunde en 30 Minuten




6 Stunde en 45 Minuten



6 Stunde en 0 Minuten



2 Stunde en 45 Minuten



9 Stunde en 15 Minuten