

## Aufgabe 1

1.  


Stunde en      Minuten

.....

2.  

Stunde en      Minuten

.....

3.  

Stunde en      Minuten

.....

4.  

Stunde en      Minuten

.....

5.  

Stunde en      Minuten

.....

## Aufgabe 2

1.  

Stunde en      Minuten

.....

2.  

Stunde en      Minuten

.....

3.  

Stunde en      Minuten

.....

4.  

Stunde en      Minuten

.....


5.  

Stunde en      Minuten


.....



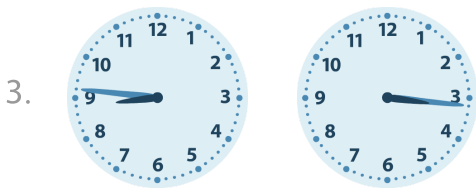
### Aufgabe 1



3 Stunde en 51 Minuten



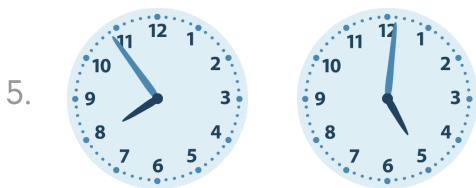
3 Stunde en 2 Minuten



5 Stunde en 30 Minuten




2 Stunde en 15 Minuten




2 Stunde en 53 Minuten

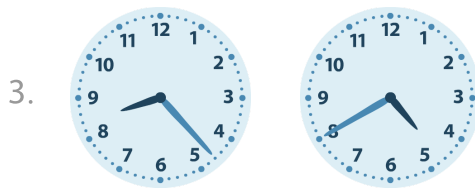
### Aufgabe 2




1 Stunde en 47 Minuten



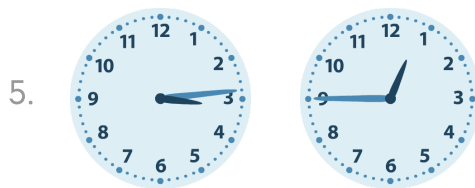
5 Stunde en 57 Minuten



3 Stunde en 43 Minuten



2 Stunde en 10 Minuten



2 Stunde en 29 Minuten