

Aufgabe 1

1.  

Stunde en Minuten

.....

2.  

Stunde en Minuten

.....

3.  

Stunde en Minuten

.....

4.  

Stunde en Minuten

.....

5.  

Stunde en Minuten

.....

Aufgabe 2

1.  


Stunde en Minuten

.....

2.  

Stunde en Minuten

.....

3.  

Stunde en Minuten

.....

4.  

Stunde en Minuten

.....

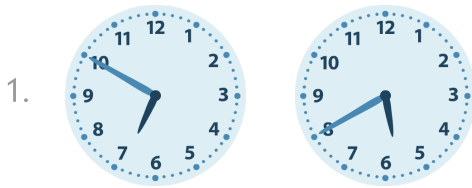
5.  

Stunde en Minuten

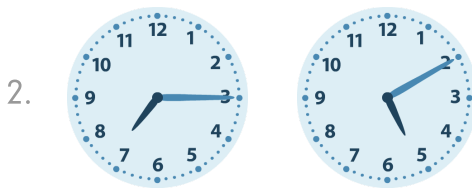
.....



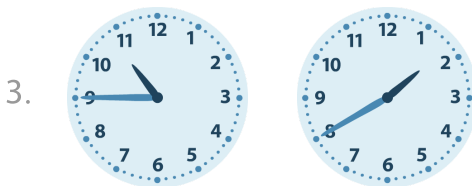
Aufgabe 1




1 Stunde en 10 Minuten




2 Stunde en 5 Minuten



9 Stunde en 5 Minuten




0 Stunde en 20 Minuten




2 Stunde en 40 Minuten

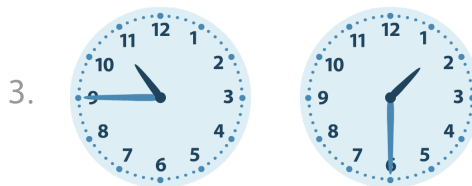
Aufgabe 2



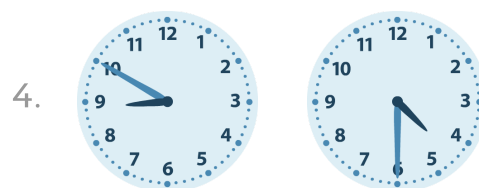
3 Stunde en 55 Minuten




0 Stunde en 5 Minuten



9 Stunde en 15 Minuten



4 Stunde en 20 Minuten



6 Stunde en 15 Minuten