







Aufgabe 1

1.    
Stunde en      Minuten  
.....

2.    
Stunde en      Minuten  
.....



3.    
Stunde en      Minuten  
.....

4.    
Stunde en      Minuten  
.....


5.    
Stunde en      Minuten  
.....

Aufgabe 2

1.    
Stunde en      Minuten  
.....

2.    
Stunde en      Minuten  
.....


3.    
Stunde en      Minuten  
.....

4.    
Stunde en      Minuten  
.....

5.    
Stunde en      Minuten  
.....




### Aufgabe 1




7 Stunde en 0 Minuten

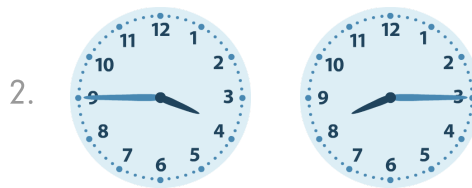
### Aufgabe 2




0 Stunde en 30 Minuten




3 Stunde en 0 Minuten




4 Stunde en 30 Minuten




0 Stunde en 15 Minuten




5 Stunde en 30 Minuten



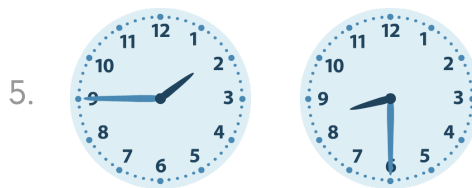
9 Stunde en 30 Minuten



6 Stunde en 0 Minuten



4 Stunde en 0 Minuten



6 Stunde en 45 Minuten