

Aufgabe 1

1.  

Stunde en Minuten

.....

2.  

Stunde en Minuten

.....

3.  



Stunde en Minuten

.....

4.  

Stunde en Minuten


.....

5.  

Stunde en Minuten

.....

Aufgabe 2

1.  

Stunde en Minuten

.....

2.  

Stunde en Minuten

.....

3.  


Stunde en Minuten

.....

4.  

Stunde en Minuten

.....


5.  

Stunde en Minuten

.....




Aufgabe 1




8 Stunde en 55 Minuten

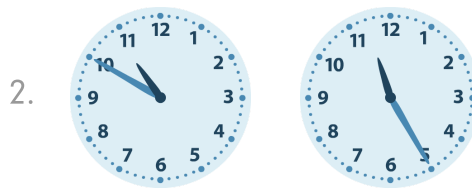
Aufgabe 2



1 Stunde en 20 Minuten




4 Stunde en 20 Minuten




0 Stunde en 35 Minuten



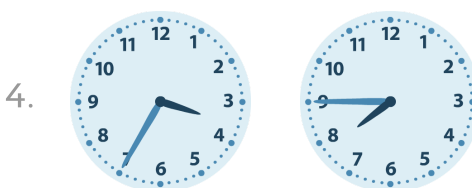
2 Stunde en 40 Minuten




10 Stunde en 15 Minuten



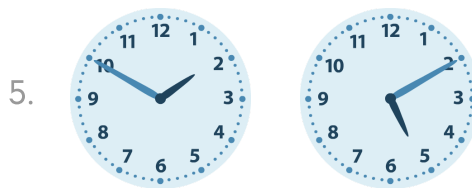
0 Stunde en 20 Minuten



4 Stunde en 10 Minuten



2 Stunde en 25 Minuten



3 Stunde en 20 Minuten