

Aufgabe 1

1.  



Stunde en Minuten

.....

2.  

Stunde en Minuten

.....

3.  

Stunde en Minuten

.....

4.  

Stunde en Minuten


.....

5.  

Stunde en Minuten

.....

Aufgabe 2

1.  



Stunde en Minuten

.....

2.  

Stunde en Minuten

.....

3.  

Stunde en Minuten

.....

4.  

Stunde en Minuten

.....

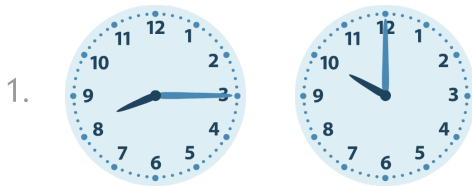
5.  

Stunde en Minuten

.....




Aufgabe 1




1 Stunde en 45 Minuten

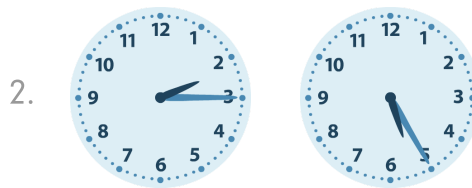
Aufgabe 2




0 Stunde en 30 Minuten




9 Stunde en 55 Minuten




3 Stunde en 10 Minuten




3 Stunde en 10 Minuten



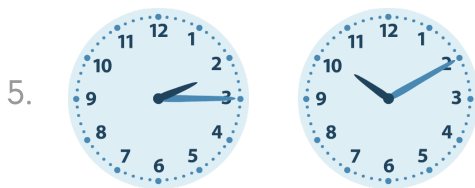
5 Stunde en 10 Minuten



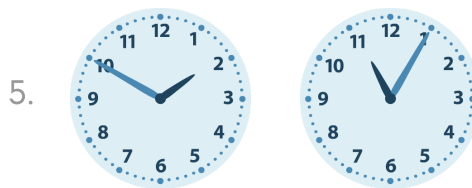
7 Stunde en 30 Minuten



10 Stunde en 10 Minuten



7 Stunde en 55 Minuten



9 Stunde en 15 Minuten