





Aufgabe 1

1.  

Stunde en Minuten

.....

2.  

Stunde en Minuten

.....

3.  



Stunde en Minuten

.....

4.  

Stunde en Minuten



.....

5.  

Stunde en Minuten



.....

Aufgabe 2

1.  


Stunde en Minuten

.....

2.  


Stunde en Minuten

.....

3.  


Stunde en Minuten

.....

4.  

Stunde en Minuten


.....

5.  

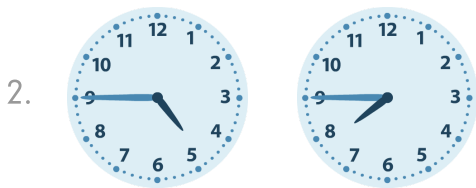
Stunde en Minuten

.....

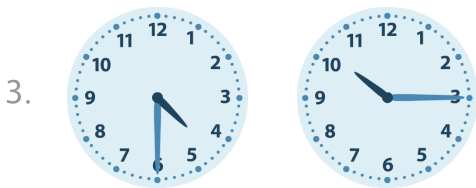
Aufgabe 1




5 Stunde en 45 Minuten



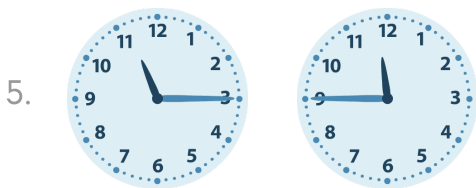
3 Stunde en 0 Minuten



5 Stunde en 45 Minuten




3 Stunde en 0 Minuten




0 Stunde en 30 Minuten


Aufgabe 2




3 Stunde en 45 Minuten




3 Stunde en 30 Minuten



8 Stunde en 30 Minuten



3 Stunde en 0 Minuten



9 Stunde en 15 Minuten