

## Aufgabe 1

1.  

Stunde en      Minuten

.....

2.  

Stunde en      Minuten

.....

3.  

Stunde en      Minuten

.....

4.  

Stunde en      Minuten

.....

5.  

Stunde en      Minuten


.....

## Aufgabe 2

1.  

Stunde en      Minuten

.....

2.  

Stunde en      Minuten

.....

3.  

Stunde en      Minuten

.....

4.  

Stunde en      Minuten

.....


5.  

Stunde en      Minuten

.....

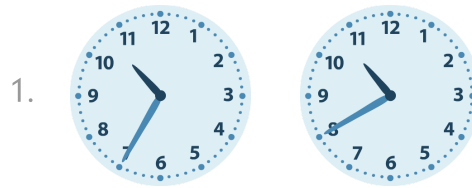


### Aufgabe 1




7 Stunde en 55 Minuten

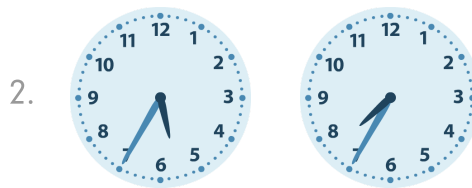
### Aufgabe 2



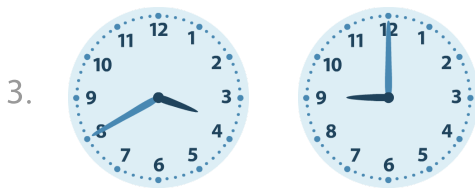
0 Stunde en 5 Minuten




6 Stunde en 15 Minuten



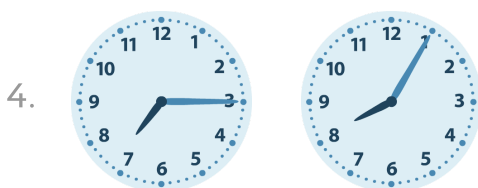
2 Stunde en 0 Minuten




5 Stunde en 20 Minuten




1 Stunde en 5 Minuten



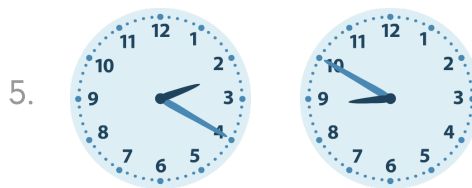
0 Stunde en 50 Minuten



4 Stunde en 35 Minuten



2 Stunde en 15 Minuten



6 Stunde en 30 Minuten