



Aufgabe 1

1.  


Stunde en Minuten

.....

2.  

Stunde en Minuten

.....

3.  

Stunde en Minuten

.....

4.  

Stunde en Minuten

.....

5.  

Stunde en Minuten

.....

Aufgabe 2

1.  

Stunde en Minuten

.....

2.  

Stunde en Minuten

.....

3.  

Stunde en Minuten

.....

4.  

Stunde en Minuten


.....

5.  


Stunde en Minuten

.....


Aufgabe 1




6 Stunde en 30 Minuten




6 Stunde en 15 Minuten



6 Stunde en 30 Minuten

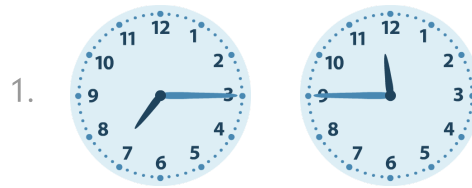


5 Stunde en 15 Minuten




8 Stunde en 45 Minuten


Aufgabe 2




4 Stunde en 30 Minuten



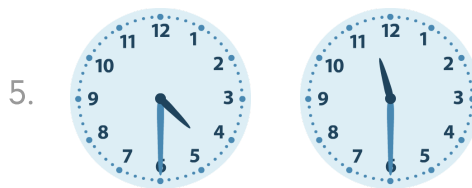
0 Stunde en 30 Minuten



4 Stunde en 30 Minuten



5 Stunde en 15 Minuten



7 Stunde en 0 Minuten