

Aufgabe 1

1.  

Stunde en Minuten


.....

Aufgabe 2

1.  


Stunde en Minuten

.....

2.  

Stunde en Minuten

.....

2.  



Stunde en Minuten

.....

3.  

Stunde en Minuten

.....

3.  

Stunde en Minuten

.....

4.  

Stunde en Minuten

.....

4.  

Stunde en Minuten

.....

5.  

Stunde en Minuten

.....

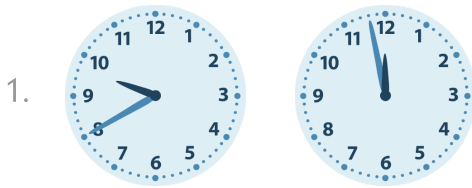
5.  

Stunde en Minuten


.....




Aufgabe 1




2 Stunde en 18 Minuten




8 Stunde en 25 Minuten



5 Stunde en 31 Minuten

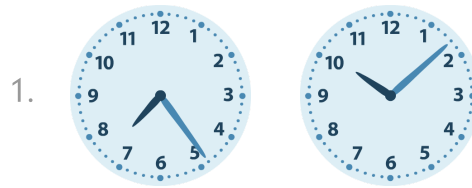


1 Stunde en 9 Minuten

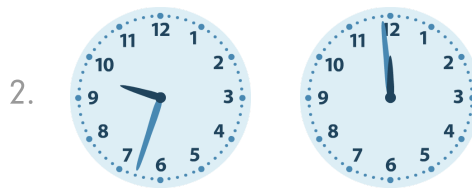


8 Stunde en 57 Minuten


Aufgabe 2



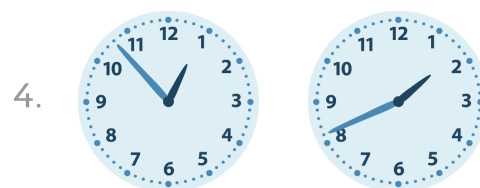
2 Stunde en 44 Minuten




2 Stunde en 26 Minuten



2 Stunde en 16 Minuten



0 Stunde en 48 Minuten



1 Stunde en 5 Minuten