



## Aufgabe 1

1.  


Stunde en      Minuten

.....

2.  

Stunde en      Minuten

.....

3.  


Stunde en      Minuten

.....

4.  

Stunde en      Minuten

.....

5.  

Stunde en      Minuten


.....

## Aufgabe 2

1.  



Stunde en      Minuten

.....

2.  

Stunde en      Minuten

.....

3.  


Stunde en      Minuten

.....

4.  

Stunde en      Minuten

.....


5.  

Stunde en      Minuten


.....




### Aufgabe 1




8 Stunde en 15 Minuten




2 Stunde en 10 Minuten



0 Stunde en 20 Minuten




0 Stunde en 50 Minuten




7 Stunde en 55 Minuten


### Aufgabe 2




3 Stunde en 45 Minuten




3 Stunde en 20 Minuten



7 Stunde en 20 Minuten



4 Stunde en 25 Minuten



9 Stunde en 0 Minuten